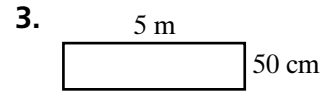
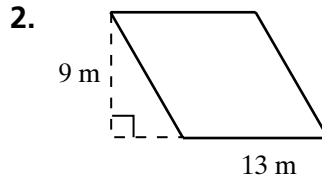
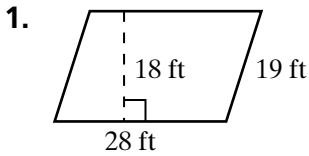
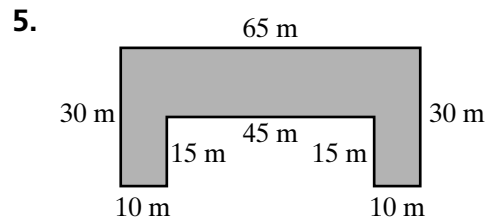
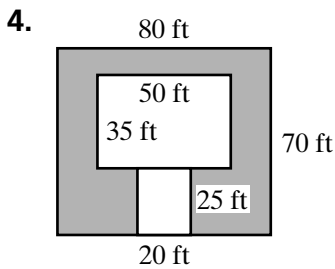


Practice 10-1 Area: Parallelograms

Find the area of each parallelogram.



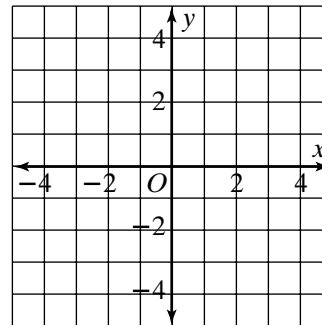
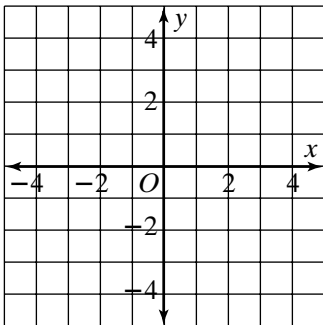
Find the area of each shaded region. Assume that all angles that appear to be right angles are right angles.



The vertices of a parallelogram are given. Draw each parallelogram. Find its area.

6. $P(1, 1), Q(3, 1), R(2, 4), S(4, 4)$

7. $J(-3, 2), K(1, 2), M(-1, -3), L(3, -3)$



8. The perimeter of a square is 72 in. What is its area?